

Entering Third Grade

It is important for children to keep an interest in reading during the summer months. Reading helps the children with their sight vocabulary, increases their usable vocabulary, improves comprehension and strengthens their reading fluency.

1. Your child is required to read *The Chocolate Touch* by Patrick Catling and complete the summer reading book report.
2. Please have your child read a second book and be ready to discuss it with their classmates upon returning to school. The second book choices are:
Encyclopedia Brown, Boy Detective by Donald J. Sobol
Ramona Quimby, Age 8 by Beverly Cleary
Snowflake Bentley by Jacqueline Briggs Martin
3. Suggestions for additional reading can be found below.

All That's Missing by Sarah Sullivan Secretly providing for himself and a beloved grandfather who is succumbing to dementia, young Arlo is placed in the care of a social worker and runs away to find and connect with his only other family member. ©2013 Grade Level 3-7

Fly Away by Patricia MacLachlan While in North Dakota helping her Aunt Frankie prepare for a possible flood, Lucy finds her voice as a poet with the help of her two-year-old brother Teddy, the rest of their family, and a few cows. ©2015 Grade Level 3-4

Grand Canyon by Jason Chin Rivers wind through earth, cutting down and eroding the soil for millions of years, creating a cavity in the ground 277 miles long, 18 miles wide, and more than a mile deep known as the Grand Canyon. 2018 Caldecott Honor Book, Sibert Honor Book ©2017 Grade Level 3-5

Honey by Sarah Weeks Melody has lived in Royal, Indiana, for as long as she can remember. It's been just her and her father, and she's been okay with that. But then she overhears him calling someone Honey -- and suddenly it feels like everyone in Royal has a secret. ©2016 Grade Level 3-5

The Hundred Dresses by Eleanor Estes In winning a medal she is no longer there to receive, a tightlipped little Polish girl teaches her classmates a lesson. 1945 Newbery Honor New edition ©2004 Grade Level 3-5

John Lincoln Clem: a Civil War Drummer Boy by E. F. Abbott Do you have what it takes to run off and join the army, leaving your family behind? That's what John Lincoln Clem, a nine-year-old boy living in Ohio, does as the American Civil War rages on. ©2017 Grade Level 3-4

Mallory McDonald, Super Sitter by Laurie B. Friedman "Mallory takes on a babysitting job, only to discover that it is more work than she expected and that she will have to learn to balance her commitments". ©2017 Grade Level 3-5

The Poet's Dog by Patricia MacLachlan Teddy is a gifted dog. Raised in a cabin by a poet named Sylvan, he grew up listening to sonnets read aloud and the comforting clicking of a keyboard. ©2016 Grade Level 3-5

Revised May 2019

St. John Bosco and His Big Gray Dog by Hayley Medeiros It is hard to believe that anyone would have ever wanted to hurt good Father John Bosco. He helped so many people. But there were times when his life was in danger. During those times, a very special guardian would appear to protect him. ©2015 Grade Level 2-4

Sergeant Reckless: The True Story of the Little Horse Who Became a Hero by Patricia McCormick When a group of US Marines fighting in the Korean War found a bedraggled mare, they wondered if she could be trained to a packhorse. ©2017 Grade Level 1-5

Six Dots: A Story of Young Louis Braille by Jen Bryant Louis Braille was just five years old when he lost his sight. He was a clever boy, determined to live like everyone else, and what he wanted more than anything was to be able to read. ©2016 Grade Level 2-4

The Sign of the Carved Cross by Lisa M. Hendey Katie joins her friends in being mean to the new girl, Lily. But suddenly, Katie becomes the new girl—in 1675! She has no idea how she traveled in time to a Native American village, but she's hoping the young woman she meets will be nicer to her than Katie was to Lily. ©2015 Grade Level 2-5


Swimming with Sharks: The Daring Discoveries of Eugenie Clark by Heather Lang Before Eugenie Clark's groundbreaking research, most people thought sharks were vicious, blood-thirsty killers. From the first time she saw a shark in an aquarium, Japanese-American Eugenie was enthralled. ©2016 Grade Level 2-3

Voice of Freedom: Fannie Lou Hamer, Spirit of the Civil Rights Movement by Carole Boston Weatherford Despite fierce prejudice and abuse, even being beaten to within an inch of her life, Fannie Lou Hamer was a champion of civil rights from the 1950s until her death in 1977. Integral to the Freedom Summer of 1964. 2016 Caldecott Honor Book, Robert F. Sibert Honor Book, and John Steptoe New Talent Illustrator Award ©2015 Grade Level 3-6

The Whisper in the Ruins (Chime Travelers) by Lisa M. Hendey Somebody is angry, and they're taking it out on St. Anne's. Patrick and his twin sister Katie are shocked when they learn that someone threw a brick through the St. Francis of Assisi stained glass window at St. Anne's. What would make someone angry enough to damage the beautiful old window? ©2016 Grade Level 2-5

Wish by Barbara O'Connor "A story about a girl who, with the help of the dog of her dreams, discovers that family doesn't always have to be related--they are simply people who love you for who you are." ©2016 Grade Level 3-5

Year of Billy Miller by Kevin Henkes Seven-year-old Billy Miller starts second grade with a bump on his head and a lot of worries, but by the end of the year he has developed good relationships with his teacher, his little sister, and his parents and learned many important lessons. 2013 Newbery Honor Book ©2013 Grade Level 2-4



Summer Math

for Students Entering 3rd Grade

Name _____

Set a timer for one minute.

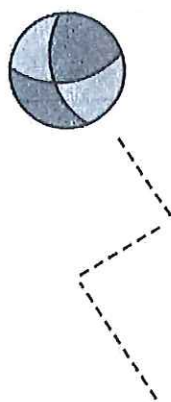
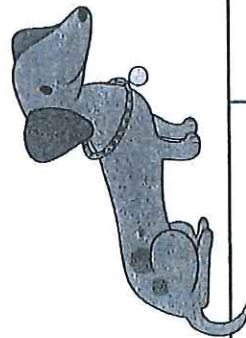
How many facts can you answer correctly in one minute? Write your score here. →→

Score

20

Fast Facts

Help Taco find his ball. color all the squares with an even sum.



$$\begin{array}{r} 4 \\ + 8 \\ \hline \end{array}$$

$$\begin{array}{r} 1 \\ + 6 \\ \hline \end{array}$$

$$\begin{array}{r} 9 \\ + 8 \\ \hline \end{array}$$

$$\begin{array}{r} 5 \\ + 5 \\ \hline \end{array}$$

$$\begin{array}{r} 8 \\ + 2 \\ \hline \end{array}$$

$$\begin{array}{r} 2 \\ + 6 \\ \hline \end{array}$$

$$\begin{array}{r} 6 \\ + 6 \\ \hline \end{array}$$

$$\begin{array}{r} 2 \\ + 7 \\ \hline \end{array}$$

$$\begin{array}{r} 7 \\ + 3 \\ \hline \end{array}$$

$$\begin{array}{r} 5 \\ + 2 \\ \hline \end{array}$$

$$\begin{array}{r} 3 \\ + 2 \\ \hline \end{array}$$

$$\begin{array}{r} 2 \\ + 4 \\ \hline \end{array}$$

$$\begin{array}{r} 9 \\ + 1 \\ \hline \end{array}$$

$$\begin{array}{r} 8 \\ + 6 \\ \hline \end{array}$$

$$\begin{array}{r} 8 \\ + 8 \\ \hline \end{array}$$

$$\begin{array}{r} 6 \\ + 7 \\ \hline \end{array}$$

$$\begin{array}{r} 8 \\ + 3 \\ \hline \end{array}$$

$$\begin{array}{r} 7 \\ + 8 \\ \hline \end{array}$$

$$\begin{array}{r} 5 \\ + 6 \\ \hline \end{array}$$

Score

20

Set a timer for one minute.

How many facts can you answer correctly in one minute? Write your score here. →→



candy

Colors:

Sums 6 or Less: Blue

Sums 7 - 13: Purple

Sums 14 or Greater: orange

$3 + 5 =$

$4 + 7 =$

$7 + 7 =$

$5 + 1 =$

$7 + 9 =$

$9 + 3 =$

$5 + 4 =$

$8 + 5 =$

$0 + 8 =$

$7 + 5 =$

$2 + 4 =$

$6 + 8 =$

$7 + 1 =$

$9 + 4 =$

$6 + 9 =$

$6 + 0 =$

$3 + 1 =$

$5 + 9 =$

$8 + 7 =$

$9 + 9 =$

Score

20

Set a timer for one minute.

How many facts can you answer correctly
in one minute? Write your score here. →→

Fast Facts

Scoops! Color the scoops your favorite ice cream flavors.

$$\begin{array}{r} 1 \\ + 2 \\ \hline \end{array}$$

$$\begin{array}{r} 5 \\ + 7 \\ \hline \end{array}$$

$$\begin{array}{r} 1 \\ + 9 \\ \hline \end{array}$$

$$\begin{array}{r} 4 \\ + 9 \\ \hline \end{array}$$

$$\begin{array}{r} 2 \\ + 9 \\ \hline \end{array}$$

$$\begin{array}{r} 8 \\ + 5 \\ \hline \end{array}$$

$$\begin{array}{r} 2 \\ + 3 \\ \hline \end{array}$$

$$\begin{array}{r} 6 \\ + 4 \\ \hline \end{array}$$

$$\begin{array}{r} 7 \\ + 6 \\ \hline \end{array}$$

$$\begin{array}{r} 0 \\ + 6 \\ \hline \end{array}$$

$$\begin{array}{r} 6 \\ + 5 \\ \hline \end{array}$$

$$\begin{array}{r} 6 \\ + 2 \\ \hline \end{array}$$

$$\begin{array}{r} 6 \\ + 3 \\ \hline \end{array}$$

$$\begin{array}{r} 3 \\ + 8 \\ \hline \end{array}$$

$$\begin{array}{r} 9 \\ + 6 \\ \hline \end{array}$$

$$\begin{array}{r} 9 \\ + 5 \\ \hline \end{array}$$

$$\begin{array}{r} 8 \\ + 9 \\ \hline \end{array}$$

$$\begin{array}{r} 2 \\ + 8 \\ \hline \end{array}$$

$$\begin{array}{r} 8 \\ + 8 \\ \hline \end{array}$$

$$\begin{array}{r} 8 \\ + 4 \\ \hline \end{array}$$

Score

20

Set a timer for one minute.


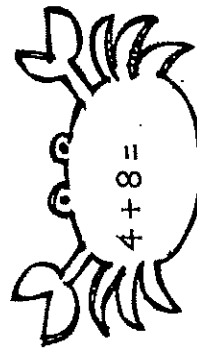
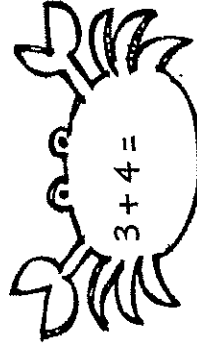

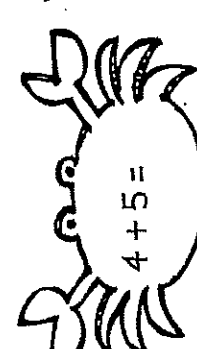
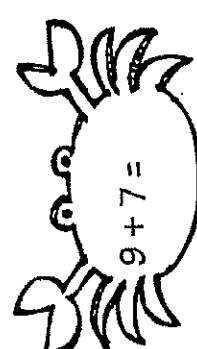
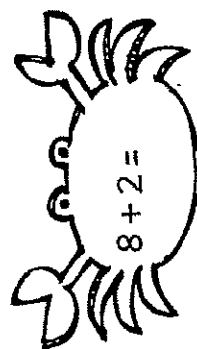
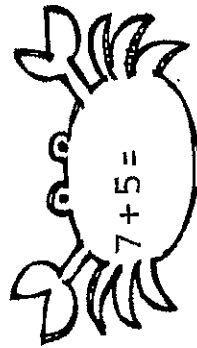

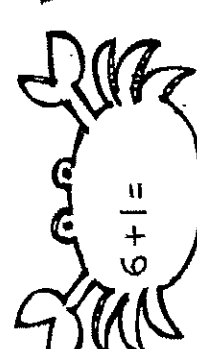
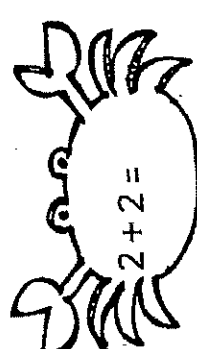
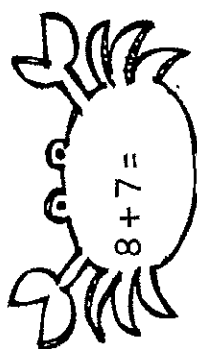
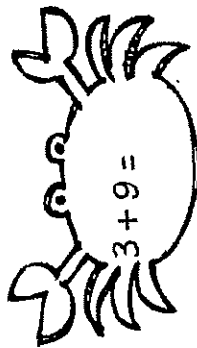
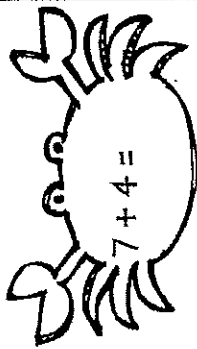

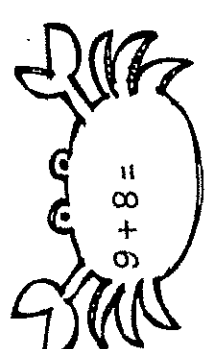
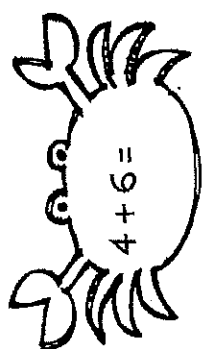

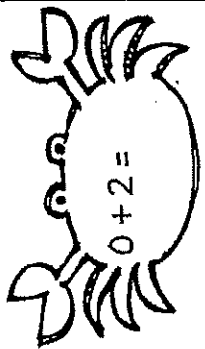
How many facts can you answer correctly in one minute? Write your score here. →→

Fast Facts



Crab attack!

See if you can score 20/20!



Score

20

Set a timer for one minute.

How many facts can you answer correctly
in one minute? Write your score here. →→

Fast Facts

Sunny days! Color the sun yellow if it has a correct answer. Practice any facts you got wrong.

$$\begin{array}{r} 8 \\ + \square \\ \hline 17 \end{array}$$

$$\begin{array}{r} \square \\ + 2 \\ \hline 9 \end{array}$$

$$\begin{array}{r} 8 \\ + \square \\ \hline 14 \end{array}$$

$$\begin{array}{r} \square \\ + 5 \\ \hline 13 \end{array}$$

$$\begin{array}{r} 3 \\ + \square \\ \hline 9 \end{array}$$

$$\begin{array}{r} \square \\ + 6 \\ \hline 11 \end{array}$$

$$\begin{array}{r} 9 \\ + \square \\ \hline 17 \end{array}$$

$$\begin{array}{r} \square \\ + 8 \\ \hline 9 \end{array}$$

$$\begin{array}{r} 4 \\ + \square \\ \hline 12 \end{array}$$

$$\begin{array}{r} \square \\ + 1 \\ \hline 7 \end{array}$$

$$\begin{array}{r} 3 \\ + \square \\ \hline 11 \end{array}$$

$$\begin{array}{r} \square \\ + 5 \\ \hline 7 \end{array}$$

$$\begin{array}{r} 7 \\ + \square \\ \hline 13 \end{array}$$

$$\begin{array}{r} \square \\ + 5 \\ \hline 9 \end{array}$$

$$\begin{array}{r} 2 \\ + \square \\ \hline 5 \end{array}$$

$$\begin{array}{r} \square \\ + 7 \\ \hline 14 \end{array}$$

$$\begin{array}{r} 8 \\ + \square \\ \hline 16 \end{array}$$

$$\begin{array}{r} \square \\ + 0 \\ \hline 9 \end{array}$$

$$\begin{array}{r} 6 \\ + \square \\ \hline 10 \end{array}$$

$$\begin{array}{r} \square \\ + 9 \\ \hline 13 \end{array}$$



Score

20

Set a timer for one minute.
How many facts can you answer correctly
in one minute? Write your score here. →→

Fast Facts

Help Bristol find the mouse. color all the squares with an odd difference.



$\begin{array}{r} 14 \\ - 8 \\ \hline \end{array}$	$\begin{array}{r} 8 \\ - 3 \\ \hline \end{array}$	$\begin{array}{r} 5 \\ - 4 \\ \hline \end{array}$	$\begin{array}{r} 8 \\ - 6 \\ \hline \end{array}$	$\begin{array}{r} 9 \\ - 7 \\ \hline \end{array}$	$\begin{array}{r} 10 \\ - 4 \\ \hline \end{array}$
$\begin{array}{r} 6 \\ - 0 \\ \hline \end{array}$	$\begin{array}{r} 15 \\ - 6 \\ \hline \end{array}$	$\begin{array}{r} 7 \\ - 3 \\ \hline \end{array}$	$\begin{array}{r} 5 \\ - 5 \\ \hline \end{array}$	$\begin{array}{r} 8 \\ - 2 \\ \hline \end{array}$	$\begin{array}{r} 12 \\ - 6 \\ \hline \end{array}$
$\begin{array}{r} 9 \\ - 1 \\ \hline \end{array}$	$\begin{array}{r} 10 \\ - 7 \\ \hline \end{array}$	$\begin{array}{r} 4 \\ - 3 \\ \hline \end{array}$	$\begin{array}{r} 5 \\ - 2 \\ \hline \end{array}$	$\begin{array}{r} 13 \\ - 6 \\ \hline \end{array}$	$\begin{array}{r} 15 \\ - 8 \\ \hline \end{array}$

Score

20

Set a timer for one minute.

How many facts can you answer correctly in one minute? Write your score here. → →

Fast Facts

candy colors:

3 or Less: Red

4 - 6: Yellow

7 - 9: Green

$4 - 2 =$

$9 - 3 =$

$10 - 8 =$

$13 - 8 =$

$12 - 4 =$

$9 - 0 =$

$16 - 8 =$

$11 - 2 =$

$7 - 6 =$

$9 - 5 =$

$13 - 4 =$

$11 - 5 =$

$14 - 6 =$

$8 - 8 =$

$3 - 1 =$

$12 - 9 =$

$6 - 2 =$

$7 - 4 =$

$16 - 9 =$

$10 - 1 =$

Score

20

Set a timer for one minute.

How many facts can you answer correctly
in one minute? Write your score here. →→

Fast Facts

Scoops! Color the scoops your favorite ice cream flavors.

$$\begin{array}{r} 3 \\ - 2 \\ \hline \end{array}$$

$$\begin{array}{r} 11 \\ - 9 \\ \hline \end{array}$$

$$\begin{array}{r} 6 \\ - 4 \\ \hline \end{array}$$

$$\begin{array}{r} 9 \\ - 8 \\ \hline \end{array}$$

$$\begin{array}{r} 13 \\ - 7 \\ \hline \end{array}$$

$$\begin{array}{r} 7 \\ - 2 \\ \hline \end{array}$$

$$\begin{array}{r} 11 \\ - 3 \\ \hline \end{array}$$

$$\begin{array}{r} 13 \\ - 9 \\ \hline \end{array}$$

$$\begin{array}{r} 10 \\ - 3 \\ \hline \end{array}$$

$$\begin{array}{r} 15 \\ - 9 \\ \hline \end{array}$$

$$\begin{array}{r} 14 \\ - 7 \\ \hline \end{array}$$

$$\begin{array}{r} 11 \\ - 6 \\ \hline \end{array}$$

$$\begin{array}{r} 7 \\ - 0 \\ \hline \end{array}$$

$$\begin{array}{r} 10 \\ - 5 \\ \hline \end{array}$$

$$\begin{array}{r} 13 \\ - 5 \\ \hline \end{array}$$

$$\begin{array}{r} 12 \\ - 5 \\ \hline \end{array}$$

$$\begin{array}{r} 9 \\ - 4 \\ \hline \end{array}$$

$$\begin{array}{r} 4 \\ - 4 \\ \hline \end{array}$$

$$\begin{array}{r} 11 \\ - 7 \\ \hline \end{array}$$

$$\begin{array}{r} 5 \\ - 3 \\ \hline \end{array}$$

Score

20

Set a timer for one minute.








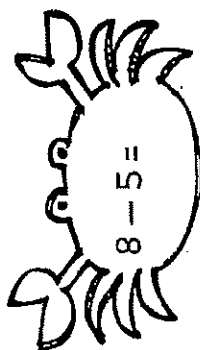
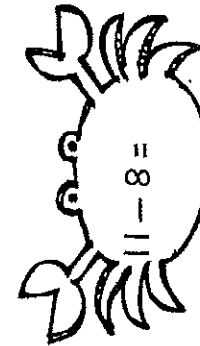








How many facts can you answer correctly in one minute? Write your score here. →→

Fast Facts



Crab attack!

See if you can score 20/20!



Score

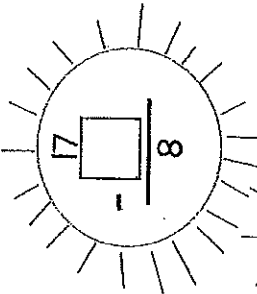
20

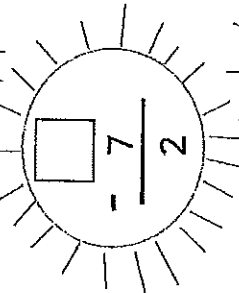
Set a timer for one minute.

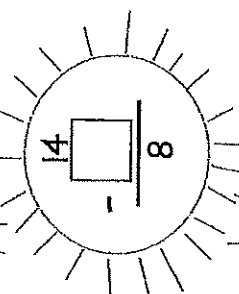
How many facts can you answer correctly
in one minute? Write your score here. →→

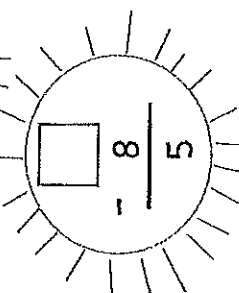
Fast Facts

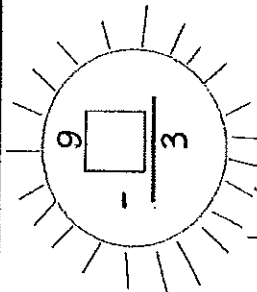
Sunny days! Color the sun yellow if it has a correct answer. Practice any facts you got wrong.

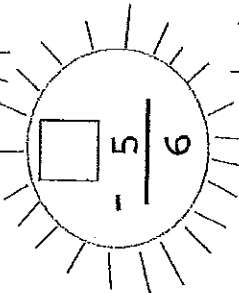

$$\begin{array}{r} 17 \\ - \square \\ \hline 8 \end{array}$$

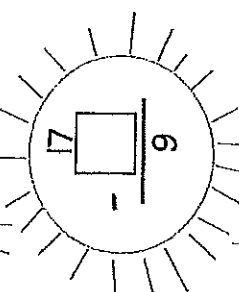

$$\begin{array}{r} \square \\ - 7 \\ \hline 2 \end{array}$$



$$\begin{array}{r} 14 \\ - \square \\ \hline 8 \end{array}$$

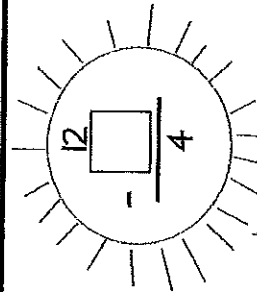

$$\begin{array}{r} \square \\ - 8 \\ \hline 5 \end{array}$$

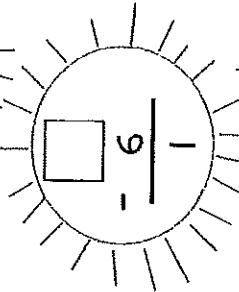

$$\begin{array}{r} 9 \\ - \square \\ \hline 3 \end{array}$$

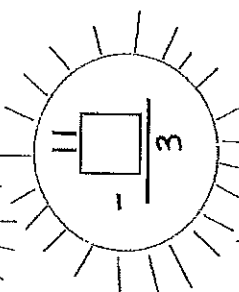

$$\begin{array}{r} \square \\ - 5 \\ \hline 6 \end{array}$$

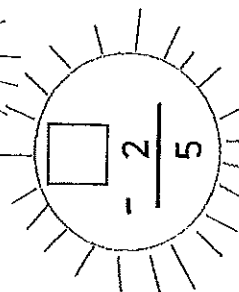

$$\begin{array}{r} 17 \\ - \square \\ \hline 9 \end{array}$$

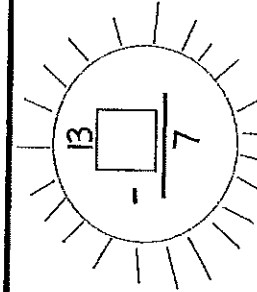

$$\begin{array}{r} \square \\ - 1 \\ \hline 8 \end{array}$$

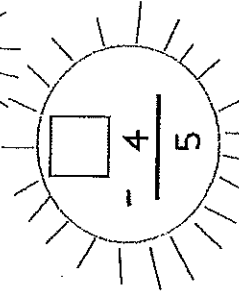

$$\begin{array}{r} 12 \\ - \square \\ \hline 4 \end{array}$$

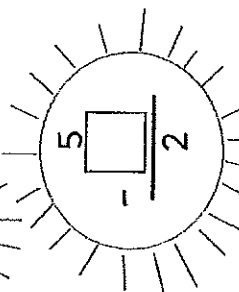

$$\begin{array}{r} \square \\ - 6 \\ \hline 1 \end{array}$$



$$\begin{array}{r} 11 \\ - \square \\ \hline 3 \end{array}$$

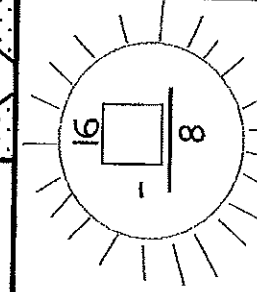

$$\begin{array}{r} \square \\ - 2 \\ \hline 5 \end{array}$$



$$\begin{array}{r} 13 \\ - \square \\ \hline 7 \end{array}$$

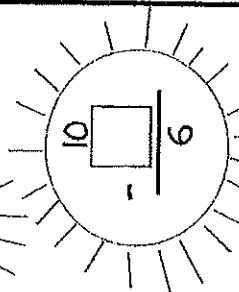

$$\begin{array}{r} \square \\ - 4 \\ \hline 5 \end{array}$$

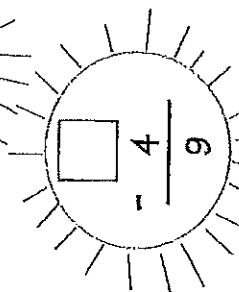

$$\begin{array}{r} 5 \\ - \square \\ \hline 2 \end{array}$$


$$\begin{array}{r} \square \\ - 7 \\ \hline 7 \end{array}$$


$$\begin{array}{r} 16 \\ - \square \\ \hline 8 \end{array}$$


$$\begin{array}{r} \square \\ - 9 \\ \hline 0 \end{array}$$


$$\begin{array}{r} 10 \\ - \square \\ \hline 6 \end{array}$$


$$\begin{array}{r} \square \\ - 4 \\ \hline 9 \end{array}$$