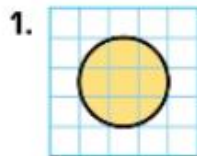


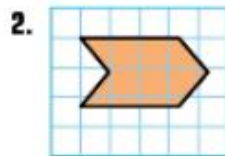
Estimate the area of the shaded figure in square units.



Full squares:   ?

Estimate of rest:   ?

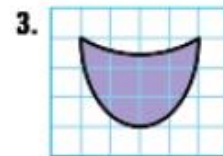
Estimate of area:   ?



Full squares:   ?

Estimate of rest:   ?

Estimate of area:   ?

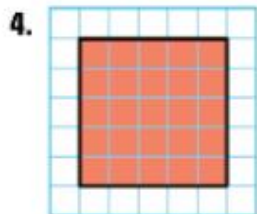


Full squares:   ?

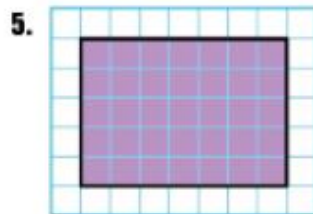
Estimate of rest:   ?

Estimate of area:   ?

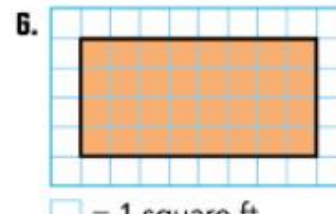
Find the area of the shaded figure.



= 1 square cm





= 1 square in.

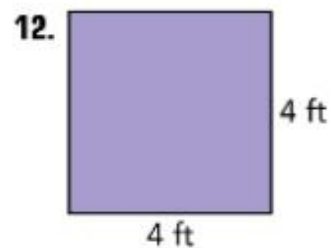
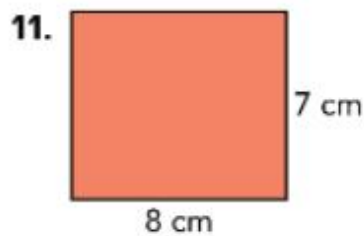
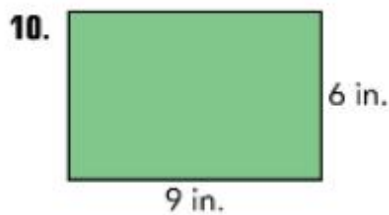


= 1 square ft

Find the area, in square units, by multiplying the length by the width. Show your work.

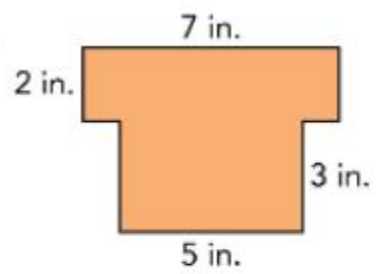


Find the area.



Find the area of each figure.

17.



18.

