

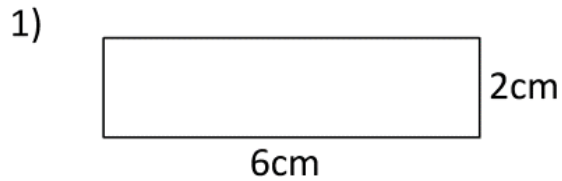
HINT: Area is when you multiply two sides
Perimeter is when you add all sides

AREA AND PERIMETER SHEET 2



Work out the area and perimeter of the following rectangles.

They are not to scale. Remember - **area inside** and **perimeter outside**.



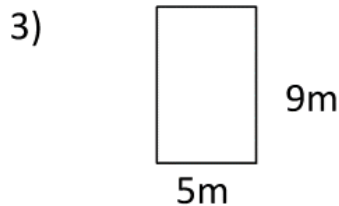
Area = _____ square cm

Perimeter = _____ cm



Area = _____ square mm

Perimeter = _____ mm



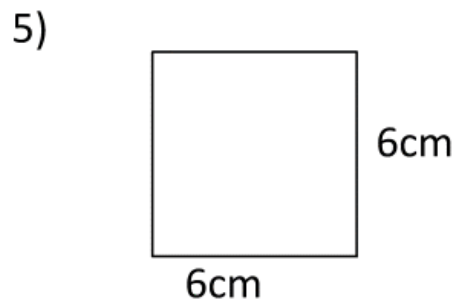
Area = _____ square m

Perimeter = _____ m



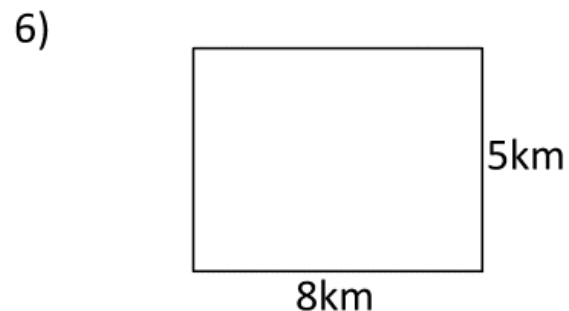
Area = _____ square ft

Perimeter = _____ ft



Area = _____ square cm

Perimeter = _____ cm



Area = _____ square km

Perimeter = _____ km