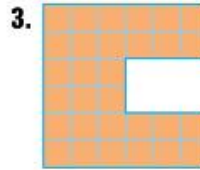
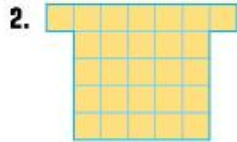
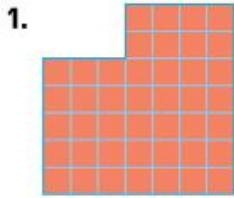
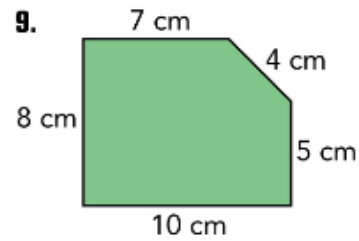
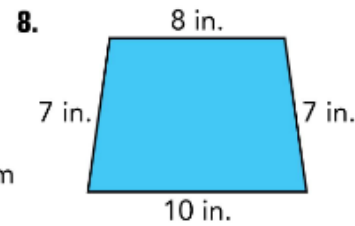
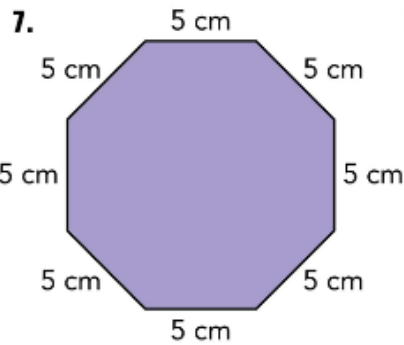
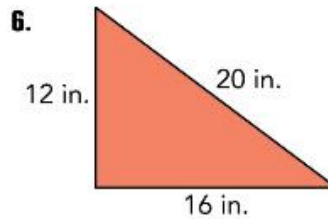
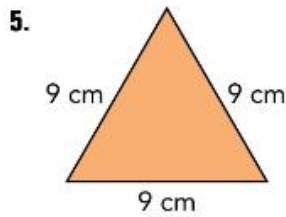
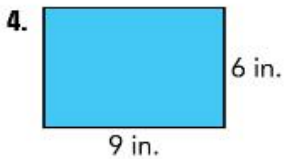


Check Your Progress

Find the perimeter of the shaded figure. Show your work.

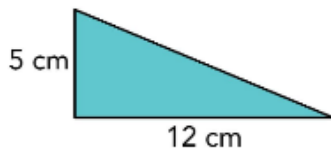


Find the perimeter of the polygon. Show your work.

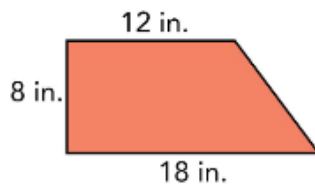


Find the length of the unknown side.

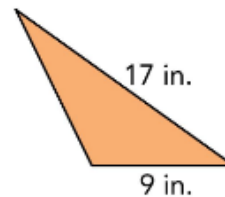
10. $P = 30$ cm



11. $P = 48$ in.



12. $P = 37$ in.



Find the lengths of the three unknown sides.

13. $P = 42$ in.



14. $P = 48$ cm



15. $P = 38$ in.

