

Review

Is the figure a polygon? Write yes or no. If it is a polygon, write what it is.

1.



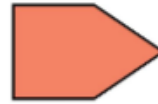
2.



3.



4.



Describe the polygon.

5.



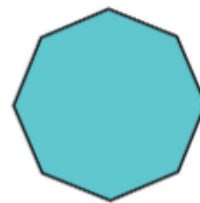
6.



7.



8.



Name: ?

Sides: ?

Angles: ?

Name: ?

Sides: ?

Angles: ?

Name: ?

Sides: ?

Angles: ?

Name: ?

Sides: ?

Angles: ?

Draw a quadrilateral to match the description.

9. a quadrilateral that has exactly 1 pair of parallel sides and 4 sides of different lengths


10. a quadrilateral that has 2 pairs of parallel sides, 0 right angles, and all sides are not equal

Draw and name a new polygon by composing the two polygons.

15.



16.

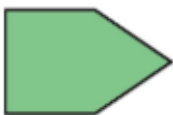


17.




Copy the polygon and decompose it into two polygons. Name the new polygons.

18.



19.



20.

