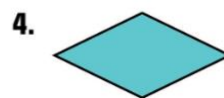
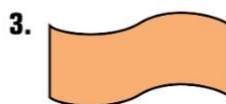
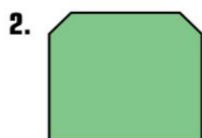


Check Your Progress

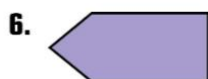
Is the figure a polygon? Write *yes* or *no*. If it is a polygon, tell the type of polygon.



Describe the polygon.



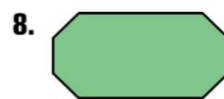
Name: ?
Sides: ?
Angles: ?



Name: ?
Sides: ?
Angles: ?

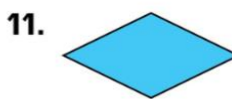


Name: ?
Sides: ?
Angles: ?




Name: ?
Sides: ?
Angles: ?

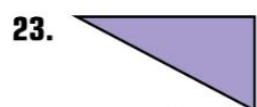
Is the quadrilateral a parallelogram? Write *yes* or *no*.



Write the number of pairs of parallel sides and the number of right angles in the quadrilateral.



Match the shape to its name or description.



A. hexagon

B. not a polygon

C. trapezoid

D. triangle