







## Incoming Second Grade Math Calendar

Monday	Tuesday	Wednesday	Thursday	Friday
1	2	3	4	5
There are 9 ducks swimming along in a line. There are 2 grown-up ducks, and the rest are babies. How many are babies?	$2 = 10 - 8$ . Write an addition sentence to help explain how to get the answer.	At the park, there are 6 friends playing baseball. Some more friends come. Now, there are 10 friends playing. a. How many friends come to play with the first 6 friends?	Pedro has 8 pennies. Anita has 4 pennies. Olga has 2 pennies. a. Whose pennies together make ten?	Circle the pairs of numbers that make ten: $2 + 6 + 8 =$
8	9W		10	11
Hakop has 6 pennies in a bowl. Nine pennies are in his drawer. How many pennies does Hakop have in all?	Write a number bond to show how to make ten. $8 + 5 = 13$	What time is it?	Solve the following by drawing quick tens: $28 + 10$	Color one fourth of the following 12 
15	16		17	18
Write the number that makes the number sentence true. $11 - 8 + \underline{\quad}$	True or False: The faces of a rectangular prism are rectangles.	What time is it?	True or False: A cylinder is hollow.	 Draw a line to make this into 2 squares
22	23	24	25	26
Maria bought 11 red balloons and 8 white balloons. How many balloons did she buy?	<b>Is this a triangle?</b> 	Mark says that 34 is the same as 2 tens and 14 ones. Suki says that 34 is the same as 34 ones. Are they correct? Explain your thinking.	Write a number bond to show how to make ten. $17 = 8 + 9$	10 less than 29 is _____
29	30	31		
Write a related subtraction fact for: $5 + 3 = 8$	Use $<$ , $>$ , or $=$ 3 tens _____ 25 ones	Write the number that makes the number sentence true. $12 = \underline{\quad} + 7$		