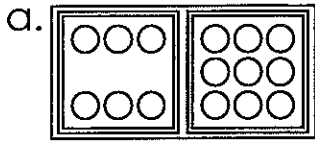


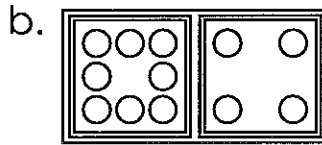
Name: _____

Add with Dominoes

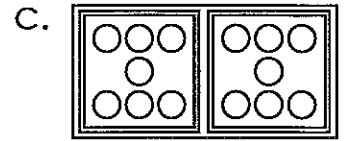
Sums up to 18



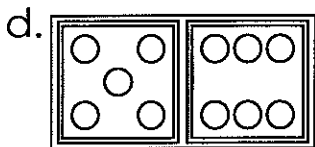
$$6 + 9 = \underline{15}$$



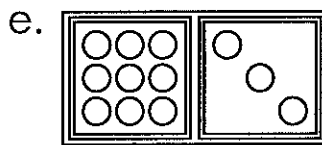
$$8 + 4 = \underline{\quad}$$



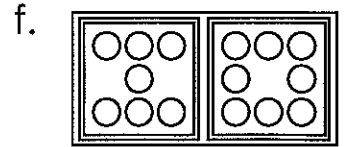
$$7 + 7 = \underline{\quad}$$



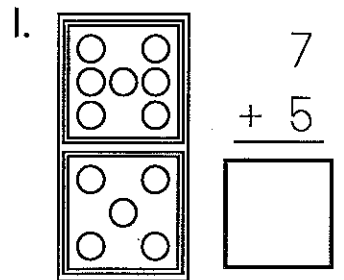
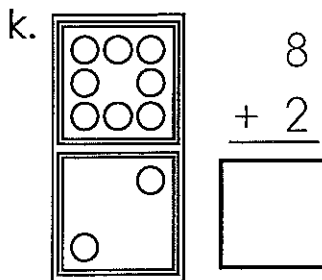
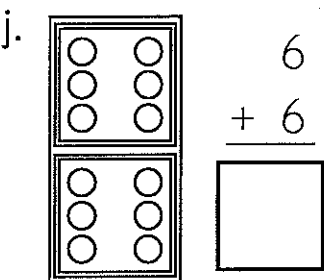
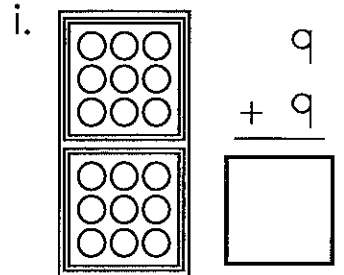
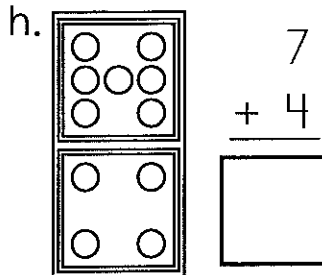
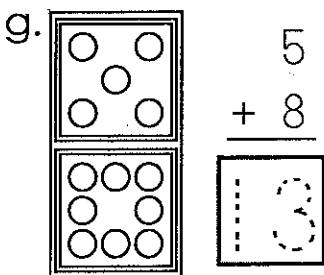
$$5 + 6 = \underline{\quad}$$



$$9 + 3 = \underline{\quad}$$



$$7 + 8 = \underline{\quad}$$




Name: _____

Score: _____ out of 43

Time: _____ minutes

Subtraction

$$\begin{array}{r} \text{a.} \quad 20 \\ - 10 \\ \hline \end{array} \quad \begin{array}{r} 16 \\ - 9 \\ \hline \end{array} \quad \begin{array}{r} 19 \\ - 9 \\ \hline \end{array} \quad \begin{array}{r} 9 \\ - 6 \\ \hline \end{array} \quad \begin{array}{r} 13 \\ - 10 \\ \hline \end{array}$$




$$\begin{array}{r} \text{b.} \quad 8 \\ - 4 \\ \hline \end{array} \quad \begin{array}{r} 17 \\ - 8 \\ \hline \end{array} \quad \begin{array}{r} 19 \\ - 10 \\ \hline \end{array} \quad \begin{array}{r} 15 \\ - 6 \\ \hline \end{array} \quad \begin{array}{r} 5 \\ - 5 \\ \hline \end{array} \quad \begin{array}{r} 6 \\ - 3 \\ \hline \end{array} \quad \begin{array}{r} 11 \\ - 4 \\ \hline \end{array}$$

$$\begin{array}{r} \text{c.} \quad 18 \\ - 8 \\ \hline \end{array} \quad \begin{array}{r} 10 \\ - 5 \\ \hline \end{array} \quad \begin{array}{r} 12 \\ - 4 \\ \hline \end{array} \quad \begin{array}{r} 8 \\ - 6 \\ \hline \end{array} \quad \begin{array}{r} 14 \\ - 8 \\ \hline \end{array} \quad \begin{array}{r} 13 \\ - 6 \\ \hline \end{array} \quad \begin{array}{r} 18 \\ - 9 \\ \hline \end{array}$$

$$\begin{array}{r} \text{d.} \quad 7 \\ - 2 \\ \hline \end{array} \quad \begin{array}{r} 11 \\ - 8 \\ \hline \end{array} \quad \begin{array}{r} 18 \\ - 10 \\ \hline \end{array} \quad \begin{array}{r} 14 \\ - 5 \\ \hline \end{array} \quad \begin{array}{r} 15 \\ - 6 \\ \hline \end{array} \quad \begin{array}{r} 5 \\ - 4 \\ \hline \end{array} \quad \begin{array}{r} 1 \\ - 0 \\ \hline \end{array}$$

$$\begin{array}{r} \text{e.} \quad 11 \\ - 9 \\ \hline \end{array} \quad \begin{array}{r} 12 \\ - 6 \\ \hline \end{array} \quad \begin{array}{r} 13 \\ - 9 \\ \hline \end{array} \quad \begin{array}{r} 14 \\ - 9 \\ \hline \end{array} \quad \begin{array}{r} 9 \\ - 4 \\ \hline \end{array} \quad \begin{array}{r} 14 \\ - 7 \\ \hline \end{array} \quad \begin{array}{r} 11 \\ - 2 \\ \hline \end{array}$$

$$\begin{array}{r} \text{f.} \quad 14 \\ - 4 \\ \hline \end{array} \quad \begin{array}{r} 13 \\ - 7 \\ \hline \end{array} \quad \begin{array}{r} 5 \\ - 2 \\ \hline \end{array}$$



$$\begin{array}{r} 12 \\ - 5 \\ \hline \end{array} \quad \begin{array}{r} 7 \\ - 4 \\ \hline \end{array}$$

$$\begin{array}{r} \text{g.} \quad 16 \\ - 8 \\ \hline \end{array} \quad \begin{array}{r} 11 \\ - 5 \\ \hline \end{array} \quad \begin{array}{r} 17 \\ - 9 \\ \hline \end{array}$$

$$\begin{array}{r} 10 \\ - 3 \\ \hline \end{array} \quad \begin{array}{r} 4 \\ - 2 \\ \hline \end{array}$$

Name: _____

Score: _____ out of 39

Time: _____ minutes

Addition & Subtraction

a. 14 10 9 8
 - 5 + 7 + 5 - 3

b. 8 12 7 8
 + 4 - 8 + 9 + 8



c. 10 4 8 12 4 15 18
 - 9 + 7 - 2 - 4 + 9 - 7 - 9

d. 11 6 3 8 20 6 15
 - 7 + 7 + 3 + 9 - 10 + 9 - 9

e. 1 10 10 13 17 6 9
 - 0 - 4 + 5 - 8 - 9 - 6 + 7

f. 16 17 2 10 12
 - 8 - 7 + 2 + 3 - 5

g. 10 7 10
 - 10 + 7 + 10 6 3



Name: _____

addition and subtraction: no re-grouping

Addition and Subtraction

a. $\begin{array}{r} 2 \\ + 7 \\ \hline \end{array}$ $\begin{array}{r} 1 \\ + 4 \\ \hline \end{array}$ $\begin{array}{r} 0 \\ + 8 \\ \hline \end{array}$ $\begin{array}{r} 18 \\ - 8 \\ \hline \end{array}$ $\begin{array}{r} 2 \\ + 9 \\ \hline \end{array}$

b. $\begin{array}{r} 9 \\ - 7 \\ \hline \end{array}$ $\begin{array}{r} 8 \\ + 6 \\ \hline \end{array}$ $\begin{array}{r} 17 \\ - 2 \\ \hline \end{array}$ $\begin{array}{r} 5 \\ + 4 \\ \hline \end{array}$ $\begin{array}{r} 14 \\ - 3 \\ \hline \end{array}$



c. $\begin{array}{r} 8 \\ - 2 \\ \hline \end{array}$ $\begin{array}{r} 16 \\ - 4 \\ \hline \end{array}$ $\begin{array}{r} 7 \\ - 0 \\ \hline \end{array}$ $\begin{array}{r} 3 \\ + 4 \\ \hline \end{array}$ $\begin{array}{r} 6 \\ + 5 \\ \hline \end{array}$ $\begin{array}{r} 19 \\ - 7 \\ \hline \end{array}$ $\begin{array}{r} 12 \\ - 2 \\ \hline \end{array}$

d. $\begin{array}{r} 6 \\ + 6 \\ \hline \end{array}$ $\begin{array}{r} 18 \\ - 7 \\ \hline \end{array}$ $\begin{array}{r} 19 \\ - 4 \\ \hline \end{array}$ $\begin{array}{r} 3 \\ + 9 \\ \hline \end{array}$ $\begin{array}{r} 1 \\ + 4 \\ \hline \end{array}$ $\begin{array}{r} 7 \\ + 3 \\ \hline \end{array}$ $\begin{array}{r} 3 \\ - 2 \\ \hline \end{array}$

e. $\begin{array}{r} 18 \\ - 2 \\ \hline \end{array}$ $\begin{array}{r} 9 \\ - 3 \\ \hline \end{array}$ $\begin{array}{r} 6 \\ + 7 \\ \hline \end{array}$ $\begin{array}{r} 8 \\ + 5 \\ \hline \end{array}$ $\begin{array}{r} 17 \\ - 3 \\ \hline \end{array}$ $\begin{array}{r} 1 \\ + 9 \\ \hline \end{array}$ $\begin{array}{r} 8 \\ + 4 \\ \hline \end{array}$

f. $\begin{array}{r} 3 \\ + 7 \\ \hline \end{array}$ $\begin{array}{r} 15 \\ - 3 \\ \hline \end{array}$ $\begin{array}{r} 8 \\ + 9 \\ \hline \end{array}$ $\begin{array}{r} 2 \\ + 7 \\ \hline \end{array}$

g. $\begin{array}{r} 4 \\ + 6 \\ \hline \end{array}$ $\begin{array}{r} 2 \\ + 5 \\ \hline \end{array}$ $\begin{array}{r} 10 \\ - 5 \\ \hline \end{array}$ $\begin{array}{r} 16 \\ - 3 \\ \hline \end{array}$



Name: _____

Fact Family Street

Use addition and subtraction to fill in the fact family living in each house.

a.

14
+, -
10 4

10	+	4	=	14
4	+	10	=	14
14	-	10	=	4
14	-	4	=	10

b.

16
+, -
11 5

	+		=	
	+		=	
	-		=	
	-		=	

c.

11
+, -
7 4

	+		=	
	+		=	
	-		=	
	-		=	

d.

11
+, -
6 5

	+		=	
	+		=	
	-		=	
	-		=	

e.

15
+, -
12 3

	+		=	
	+		=	
	-		=	
	-		=	

f.

14
+, -
8 6

	+		=	
	+		=	
	-		=	
	-		=	

g.

17
+, -
10 7

	+		=	
	+		=	
	-		=	
	-		=	

h.

14
+, -
9 5

	+		=	
	+		=	
	-		=	
	-		=	

i.

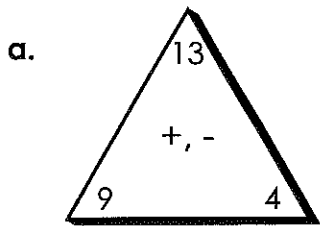
21
+, -
12 9

	+		=	
	+		=	
	-		=	
	-		=	

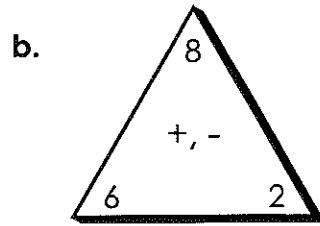
Name: _____

Fact Families

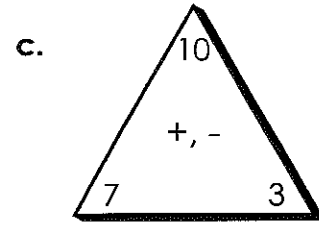
Use addition and subtraction to write the fact family for each.



$$\begin{array}{r} _ + _ = _ \\ _ + _ = _ \\ _ - _ = _ \\ _ - _ = _ \end{array}$$

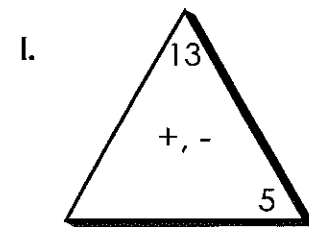
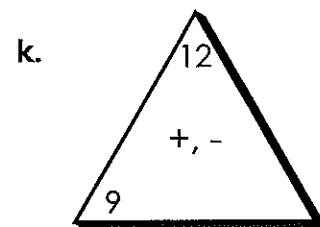
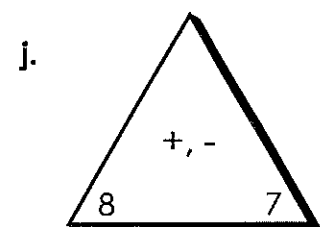
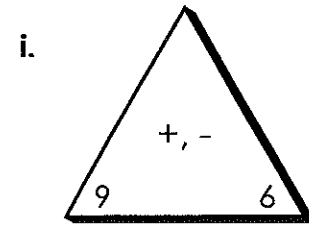
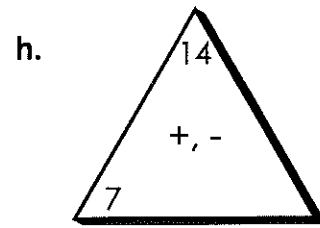
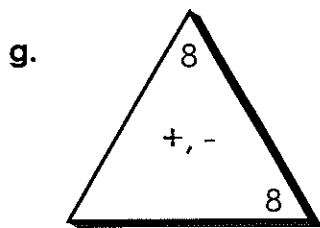
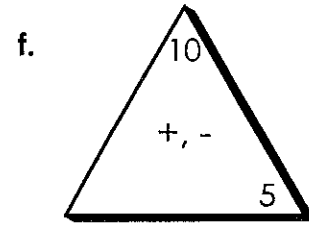
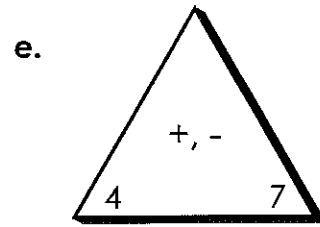
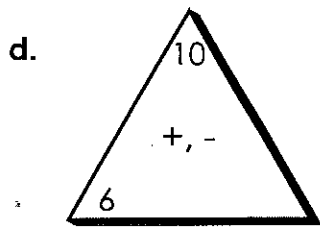


$$\begin{array}{r} _ + _ = _ \\ _ + _ = _ \\ _ - _ = _ \\ _ - _ = _ \end{array}$$



$$\begin{array}{r} _ + _ = _ \\ _ + _ = _ \\ _ - _ = _ \\ _ - _ = _ \end{array}$$

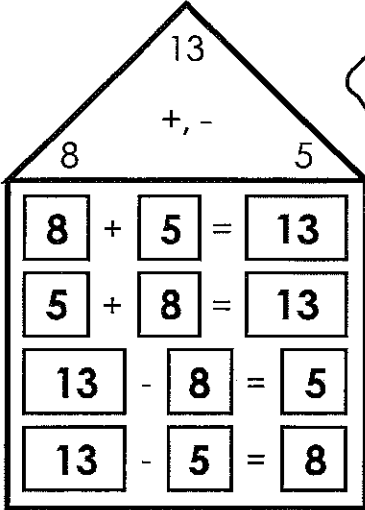
Use addition and subtraction to fill in the missing fact in each family.

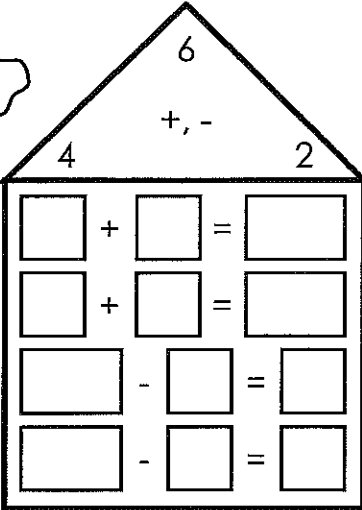


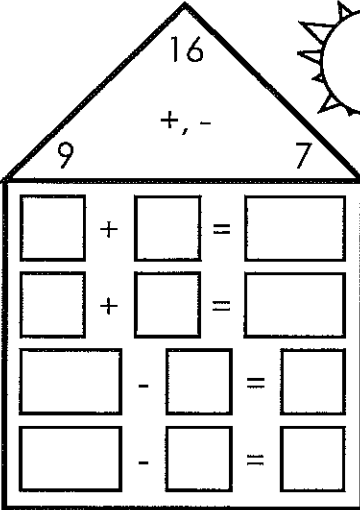
Name: _____

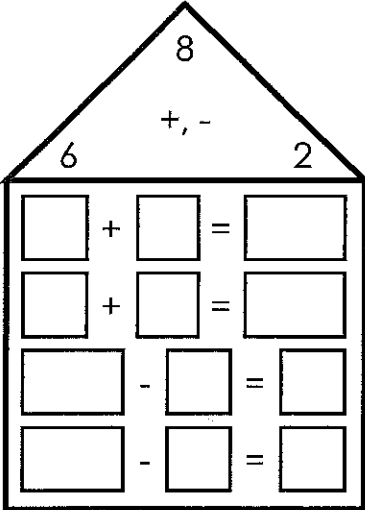
Fact Family Street


Use addition and subtraction to fill in the fact family living in each house.

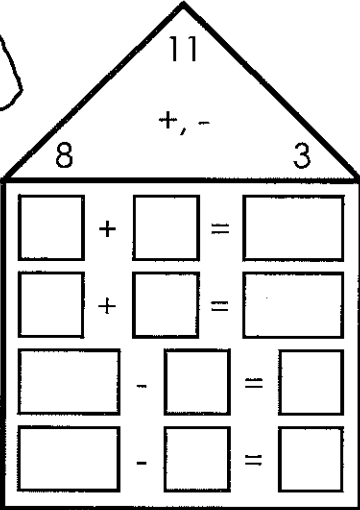
a. 

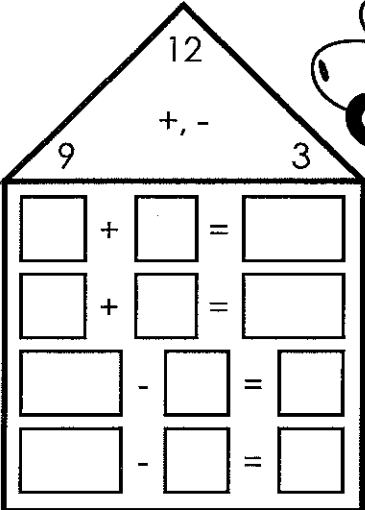
b. 

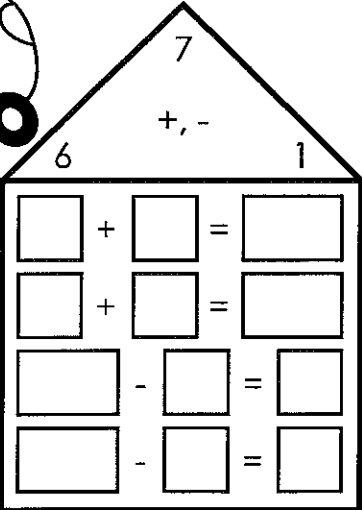
c. 

d. 

e. 

f. 

g. 

h. 

i. 