

SECOND GRADE SUMMER READING



Read, Read, Read..... Nothing improves fluency like oral reading. Try to establish a daily reading schedule. Choose 2 books from the AR list (1.5 - 2.5 grade level). Complete the book report forms and turn in by Tuesday, August 20, 2019.


A Cool Book by _____

Title

Author

Illustrator

This is a cool book because _____



Second Grade Summer Math

The following are a list of math concepts that your child will need to know for second grade:

Addition and subtraction facts up to 18 – **memorized.**
(Flashcards are helpful).

Fact Families with addition and subtraction. For example:

$$9+7=16$$

$$7+9=16$$

$$16-7=9$$

$$16-9=7$$

Place value to 100.

Telling Time to the hour and half hour.

Counting change to \$1.00.

Numbers greater and less than.

Count by 2's, 3's, 4's, 5's and 10's.

Students should be able to complete 30 problems in 4 1/2 minutes.

The following websites are very helpful.

www.funbrain.com

www.aplusmath.com

www.mathfactcafe.com

Summer Practice Review:

1. Visit www.sadlier-oxford.com/math
2. Under the mathematics tab select Progress in Mathematics K-6
3. Select student Sadlier connect: Student & Family
4. Select grade 1 textbook
5. Review lessons

Addition / Subtraction Practice

$18 - 6 =$

$14 + 3 =$

$16 - 11 =$

$7 + 2 =$

$19 - 5 =$

$8 + 8 =$

$12 - 3 =$

$11 + 9 =$

$9 + 9 =$

$5 + 7 =$

$9 + 3 =$

$16 - 9 =$

$$\begin{array}{r} 18 \\ - 7 \\ \hline \end{array}$$

$$\begin{array}{r} 13 \\ + 7 \\ \hline \end{array}$$

$$\begin{array}{r} 11 \\ - 5 \\ \hline \end{array}$$

$$\begin{array}{r} 16 \\ + 3 \\ \hline \end{array}$$

$$\begin{array}{r} 2 \\ + 8 \\ \hline \end{array}$$

$$\begin{array}{r} 7 \\ + 7 \\ \hline \end{array}$$

$$\begin{array}{r} 10 \\ + 8 \\ \hline \end{array}$$

$$\begin{array}{r} 11 \\ + 6 \\ \hline \end{array}$$

$$\begin{array}{r} 7 \\ + 3 \\ \hline \end{array}$$

$$\begin{array}{r} 17 \\ - 9 \\ \hline \end{array}$$

$$\begin{array}{r} 8 \\ + 7 \\ \hline \end{array}$$

$$\begin{array}{r} 6 \\ + 7 \\ \hline \end{array}$$

$$\begin{array}{r} 3 \\ + 4 \\ \hline 5 \end{array}$$

$$\begin{array}{r} 1 \\ + 3 \\ \hline 5 \end{array}$$

$$\begin{array}{r} 6 \\ + 4 \\ \hline 2 \end{array}$$

$$\begin{array}{r} 3 \\ + 3 \\ \hline 3 \end{array}$$

33. $7 + 9 = \underline{\quad}$
 $5 + 7 = \underline{\quad}$
 $3 + 5 = \underline{\quad}$
 $_ + _ = \underline{\quad}$

34. $2 + 4 = \underline{\quad}$
 $4 + 3 = \underline{\quad}$
 $6 + 2 = \underline{\quad}$
 $_ + _ = \underline{\quad}$

35. $1 + 2 = \underline{\quad}$
 $4 + 2 = \underline{\quad}$
 $7 + 2 = \underline{\quad}$
 $_ + _ = \underline{\quad}$

36. $9 - 2 = \underline{\quad}$
 $8 - 3 = \underline{\quad}$
 $7 - 4 = \underline{\quad}$
 $_ - _ = \underline{\quad}$

Make your own pattern using four equations.

Use **greater**. Ring the number that is greater.1.

2	6
---	---

14	16
----	----

19	17
----	----

14	10
----	----

2.

7	12
---	----

15	8
----	---

4	8
---	---

7	11
---	----

3.

5	6
---	---

2	12
---	----

15	18
----	----

20	5
----	---

4.

16	12
----	----

11	8
----	---

7	13
---	----

9	19
---	----

Use **less**. Ring the number that is less.5.

9	6
---	---

20	19
----	----

15	5
----	---

8	16
---	----

6.

7	12
---	----

15	8
----	---

4	8
---	---

7	11
---	----

7.

3	9
---	---

13	6
----	---

14	10
----	----

12	19
----	----

8.

17	10
----	----

5	14
---	----

4	18
---	----

16	11
----	----

Name _____



Date _____

Mixed Review

(Answer ID # 0692869)

Fill in the missing numbers to complete the addition fact.

1. $\begin{array}{r} 7 \\ + \square \\ \hline 12 \end{array}$	2. $\begin{array}{r} 10 \\ + \square \\ \hline 15 \end{array}$	3. $\begin{array}{r} \square \\ + 6 \\ \hline 10 \end{array}$	4. $\begin{array}{r} \square \\ + 6 \\ \hline 15 \end{array}$	5. $\begin{array}{r} \square \\ + 4 \\ \hline 13 \end{array}$
--	---	--	--	--

Write the sum.

6. $\begin{array}{r} 5 \\ + 6 \\ \hline \end{array}$	7. $\begin{array}{r} 5 \\ + 7 \\ \hline \end{array}$	8. $\begin{array}{r} 4 \\ + 9 \\ \hline \end{array}$	9. $\begin{array}{r} 9 \\ + 4 \\ \hline \end{array}$	10. $\begin{array}{r} 6 \\ + 7 \\ \hline \end{array}$
---	---	---	---	--

Write the sum.

11. $\begin{array}{r} 9 \\ 3 \\ + 3 \\ \hline \end{array}$	12. $\begin{array}{r} 5 \\ 8 \\ + 5 \\ \hline \end{array}$	13. $\begin{array}{r} 2 \\ 9 \\ + 4 \\ \hline \end{array}$	14. $\begin{array}{r} 7 \\ 8 \\ + 1 \\ \hline \end{array}$	15. $\begin{array}{r} 1 \\ 2 \\ + 9 \\ \hline \end{array}$
---	---	---	---	---

Write the sum.

16. $2 + 2 = \underline{\quad}$	17. $8 + 8 = \underline{\quad}$	18. $7 + 7 = \underline{\quad}$
------------------------------------	------------------------------------	------------------------------------

Fill in the missing numbers to complete the addition fact.

19. $\begin{array}{r} \square \\ + 3 \\ \hline 12 \end{array}$	20. $\begin{array}{r} 7 \\ + \square \\ \hline 17 \end{array}$	21. $\begin{array}{r} \square \\ + 4 \\ \hline 12 \end{array}$	22. $\begin{array}{r} 8 \\ + \square \\ \hline 12 \end{array}$	23. $\begin{array}{r} \square \\ + 7 \\ \hline 12 \end{array}$
---	---	---	---	---

Write the sum.

24. $3 + 8 = \underline{\quad}$	25. $4 + 7 = \underline{\quad}$	26. $3 + 10 = \underline{\quad}$
------------------------------------	------------------------------------	-------------------------------------

Write the sum.

27. $7 + 10 = \underline{\quad}$	28. $9 + 4 = \underline{\quad}$	29. $7 + 5 = \underline{\quad}$
-------------------------------------	------------------------------------	------------------------------------

QUARTERS

Count. Write how much money.

1.



2.



3.



4.



5.



6.



7.



8.


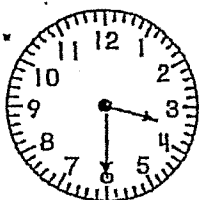


McGraw-Hill Scholastic Division

MIXED REVIEW

Write the time.


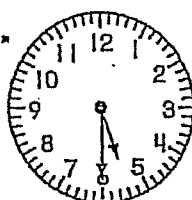
1.



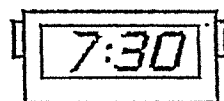
3

:30

2.




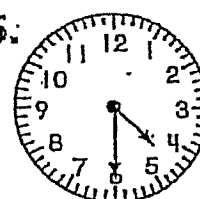
3.



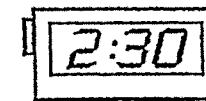
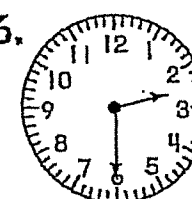
4.



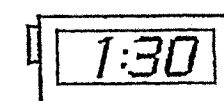
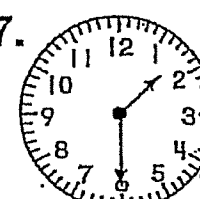
5.




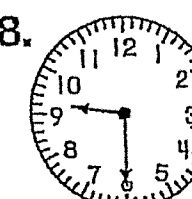
6.



7.




8.



McGraw-Hill School Division

Name: _____

ADD AND SUBTRACT

Add or subtract. Use  if you want to.

1.



$$\begin{array}{r} 5 \\ + 6 \\ \hline \end{array} \quad \begin{array}{r} 11 \\ - 6 \\ \hline 5 \end{array}$$

2.



$$\begin{array}{r} 8 \\ + 5 \\ \hline \end{array} \quad \begin{array}{r} 13 \\ - 5 \\ \hline \end{array}$$

3.

$$\begin{array}{r} 4 \\ + 7 \\ \hline \end{array} \quad \begin{array}{r} 11 \\ - 7 \\ \hline \end{array} \quad \begin{array}{r} 6 \\ + 7 \\ \hline \end{array} \quad \begin{array}{r} 13 \\ - 7 \\ \hline \end{array} \quad \begin{array}{r} 9\text{¢} \\ + 3\text{¢} \\ \hline \end{array} \quad \begin{array}{r} 12\text{¢} \\ - 3\text{¢} \\ \hline \end{array}$$

4.

$$\begin{array}{r} 7 \\ + 8 \\ \hline \end{array} \quad \begin{array}{r} 15 \\ - 8 \\ \hline \end{array} \quad \begin{array}{r} 6\text{¢} \\ + 8\text{¢} \\ \hline \end{array} \quad \begin{array}{r} 14\text{¢} \\ - 8\text{¢} \\ \hline \end{array} \quad \begin{array}{r} 2 \\ + 9 \\ \hline \end{array} \quad \begin{array}{r} 11 \\ - 9 \\ \hline \end{array}$$

5.

$$\begin{array}{r} 8 \\ + 8 \\ \hline \end{array} \quad \begin{array}{r} 16 \\ - 8 \\ \hline \end{array} \quad \begin{array}{r} 9 \\ + 8 \\ \hline \end{array} \quad \begin{array}{r} 17 \\ - 8 \\ \hline \end{array} \quad \begin{array}{r} 7\text{¢} \\ + 5\text{¢} \\ \hline \end{array} \quad \begin{array}{r} 12\text{¢} \\ - 5\text{¢} \\ \hline \end{array}$$

Name: _____

FACT FAMILIES

Complete the fact family.

1.

$$5 + 7 = 12$$

$$7 + 5 = 12$$

$$12 - 7 = 5$$

$$12 - 5 = 7$$

2.

$$7 + 6 = \underline{\quad}$$

$$6 + 7 = \underline{\quad}$$

$$13 - 6 = \underline{\quad}$$

$$13 - 7 = \underline{\quad}$$

3.

$$9 + 7 = \underline{\quad}$$

$$7 + 9 = \underline{\quad}$$

$$16 - 7 = \underline{\quad}$$

$$16 - 9 = \underline{\quad}$$

4.

$$5 + 6 = \underline{\quad}$$

$$6 + 5 = \underline{\quad}$$

$$11 - 6 = \underline{\quad}$$

$$11 - 5 = \underline{\quad}$$

5.

$$8 + 7 = \underline{\quad}$$

$$7 + 8 = \underline{\quad}$$

$$15 - 7 = \underline{\quad}$$

$$15 - 8 = \underline{\quad}$$

6.

$$4 + 9 = \underline{\quad}$$

$$9 + 4 = \underline{\quad}$$

$$13 - 9 = \underline{\quad}$$

$$13 - 4 = \underline{\quad}$$