

Name _____

Time to the Hour

Circle the correct time.


Then write the time another way.



THINK:



On the hour, the minute hand points to 12. The hour hand points to the hour.

1.



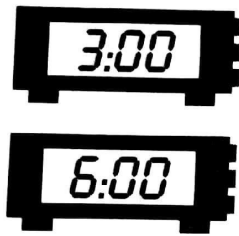

4 o'clock

2.



_____ o'clock

3.




_____ o'clock

4.




_____ o'clock





_____ o'clock

6.



_____ o'clock



_____ o'clock

8.



_____ o'clock