

SPELLING

SUMMER PACKET

Incoming 5th
Graders



W
A
T
H

G
I
T
R
I
N
G

READING

MATH REVIEW

Bridgebane Elementary has 5 fourth grade classes with 15 students in each class. The school would like to charter buses for a field trip. Each bus carries 20 students. How many buses will the school need to charter?

Answer: _____

How many students will be in each bus?

4.OA

Complete the measurement conversion chart below:

1 foot	=	12 inches
2 feet	=	_____ inches
_____ feet	=	36 inches
4 feet	=	_____ inches
_____ feet	=	_____ inches

4.MD

Write these numbers in expanded form:

4,836

6,792

9,150

4.NBT

Draw a point, a line, and a line segment:

Point



Line



Line Segment



4.G

Write an equation for the following: Add 9 and 4 then multiply by 2. Solve.

$$(\text{ } + \text{ }) \times \text{ } =$$

5.OA

Name: _____

MATH REVIEW

Find all the factors for the following number:

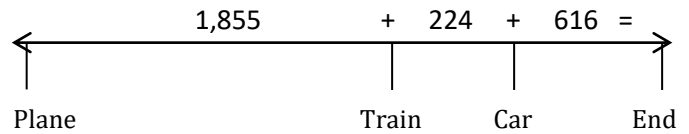
36

Factors: _____, _____, _____, _____,
_____, _____, _____, _____

Is 36 a prime or a composite number:

4.OA

Matthew and his family took a trip and flew 1,855 miles on an airplane. Then traveled 224 miles on a train and finally drove 616 miles by car. How many miles did they travel in all?



Answer: _____

4.MD

Use $<$, $>$, or $=$ for the following:

554



545

9,013



9,103

25,761



27,516

4.NBT

Solve this riddle.

I am a 2 dimensional shape with 4 sides but only 2 of my sides are parallel.

Draw me:

What am I: _____

4.G

Use $<$, $>$, or $=$ for the following:

.57



.75

7.5



7.50

29.9



2.99

5.NBT

Name: _____

MATH REVIEW

Complete the table below:

IN	OUT
3	6
4	
	8

What is the rule? _____ 4.OA

Stacy started playing her video game at 11:10 am and stopped at 1:15 pm. How long did she play?

Answer: _____

If she started reading at 1:15 pm and read for the same length of time, what time of day would she be finished?

Answer: _____

4.MD

Round the numbers below:

56 tens place _____

379 hundreds place _____

1,628 thousands place _____

34,199 ten thousands place _____

758,052 millions place _____

4.OA

Find the equivalent fractions for the fractions below:

$$\underline{6} \div \quad = \quad \underline{\quad}$$

$$8 \div \quad = \quad \underline{\quad}$$

Answer: _____

$$\underline{1} \times \quad = \quad \underline{\quad}$$

$$7 \times \quad = \quad \underline{\quad}$$

Answer: _____

4.NF

Add the fractions below.

$$\underline{2} \quad + \quad \underline{1} \quad = \quad \underline{\quad}$$

$$5 \quad \quad \quad 2$$

5.NF

Name: _____

MATH REVIEW

Rebecca dropped a box that had 38 chocolates inside. 3 chocolates were lost. Rebecca wants to share the remaining chocolates with her 4 friends.

How many will each friend get? _____

How many will be left over? _____

4.OA

Find the area for the rectangle below:



Answer: _____

4.MD

Add or subtract the following:

$$\begin{array}{r} 16 \\ + 24 \\ \hline \end{array}$$

$$\begin{array}{r} 173 \\ + 57 \\ \hline \end{array}$$

$$\begin{array}{r} 25 \\ - 15 \\ \hline \end{array}$$

$$\begin{array}{r} 517 \\ - 49 \\ \hline \end{array}$$

$$\begin{array}{r} 3,419 \\ + 403 \\ \hline \end{array}$$

$$\begin{array}{r} 9,801 \\ - 592 \\ \hline \end{array}$$

4.NBT

Draw the line of symmetry for the objects below.

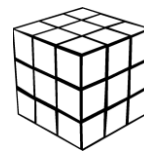


4.G

What is the volume of this cube?

Volume = Length x Width x Height

Answer: _____ cubic inches



5.MD

Name: _____

MATH REVIEW

Seth has a box of 54 paper clips. He needs to distribute them evenly to 6 people. How many clips will each person get?

What is the unknown?

Give your unknown a letter? _____

Write an equation using your unknown:

Solve and answer: _____

4.OA

Tommy is building a treehouse in his backyard. If Tommy needs 48 inches of wood but the store only sells wood by the foot, then how many feet of wood will he need to buy?

Answer: _____

4.MD

Divide the following:

$$4 \overline{) 209} \quad R$$

$$3 \overline{) 1,921} \quad R$$

4.NBT

Convert the fractions to decimals:



$$\frac{2}{10} \quad \underline{\hspace{2cm}}$$

$$\frac{6}{100} \quad \underline{\hspace{2cm}}$$

$$\frac{9}{1,000} \quad \underline{\hspace{2cm}}$$

4.NF

Circle all of the 2 dimensional figures with right angles.



5.G

Name: _____

READING REVIEW

CAMPING

By: A Thinker's Toolbox

Sam was so ecstatic for the camping trip to Yellow Stone National Park. He talked about it all week. "I'm going boating in the lake and hiking," Sam told his friends Jake and Michael. "Wow, you're so lucky!" said Jake. Jake had never been camping or hiking before and he was a little *envious* of Sam. When Sam got home from school on Friday, he began packing his bags and hiking gear. He loaded up the car with camping supplies, hiking gear, and food that would last him two days. He wanted to engross himself in nature so he left his lab top home and headed out.

Directions: Read the passage above and then answer the following questions:

1. What days will Sam be camping/hiking?

2. What does *envious* mean?

3. Why did Sam leave his lap top home?

4. Why do you think Jake told Sam, "Wow, you're so lucky!"?

Name: _____

READING REVIEW

SUMMER VACATION

By: A Thinker's Toolbox

Jessie and Kathy spent their entire summer vacation together. They played at the park, swam at the beach, and just talked for hours. Jessie had long black hair and wore braces. Kathy had short hair and wore glasses. They both loved to read and visit the library. They were inseparable. As the end of summer approached, Jessie and Kathy began to worry. Middle School had become a lonely place for each of them. Kathy moved a lot because her father was stationed different places in the military. And Jessie was *content* to leave her head in a good book. They both hoped they would be in the same class for the upcoming school year.

Directions: Read the passage above and then answer the following questions:

1. How are Jessie and Kathy alike? How are they different?

2. Why are Jessie and Kathy inseparable?

3. What does *content* mean?

4. Why does the story say that "Middle School had become a lonely place"?

Name: _____

READING REVIEW

FIRST DAY OF 5th GRADE

By: A Thinker's Toolbox

Phillip was so nervous for the first day of fifth grade. He just moved from a different state and left all of his friends behind. "What if I don't make any friends in the new school?" asked Phillip. Although, his mom reassured him that he would find many new friends, she was worried for him too. Phillip was usually the smallest boy in his class and friends never came easily to him. Despite his feelings, Phillip *mustered* up his courage and sat down in Mr. Dawson's class on his first day of school. A boy sat in the empty seat next to him and said, "I like your shirt!" Phillip introduced himself, feeling confident that he would enjoy his new school.

Directions: Read the passage above and then answer the following questions:

1. How does Phillip feel about 5th grade?

2. Why is his mom worried for Phillip?


3. What does *mustered* mean?

3. How did Phillips feelings change in the story? How do you know?

Name: _____

SPELLING REVIEW

Directions: Use these sight words to complete the activities below.



Unscramble the words below:

ewilh _____

erddnhu _____

udol _____

vrbae _____

tgstiarh _____

Rewrite the words below:

brave _____

hundred _____

loud _____

straight _____

while _____

Complete the sentence below with the correct challenge word.

reflect

quotient

night

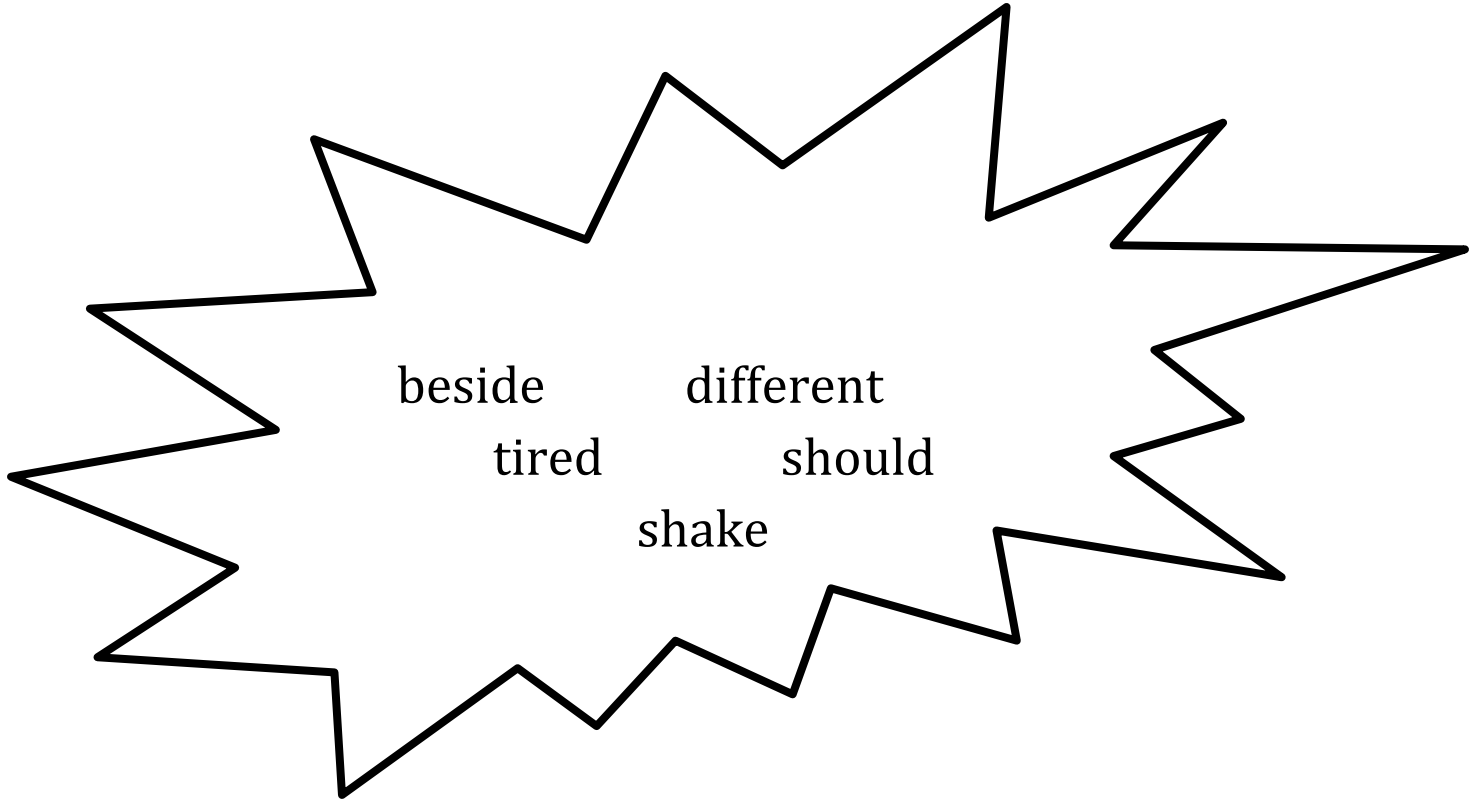
beach

The answer to a division problem is called the _____.

Name: _____

SPELLING REVIEW

Directions: Use these sight words to complete the activities below.



Put your spelling words in alphabetical order.

Rewrite the words below:

shake _____ _____

beside _____ _____

different _____ _____

tired _____ _____

should _____ _____

Complete the sentence below with the correct challenge word.

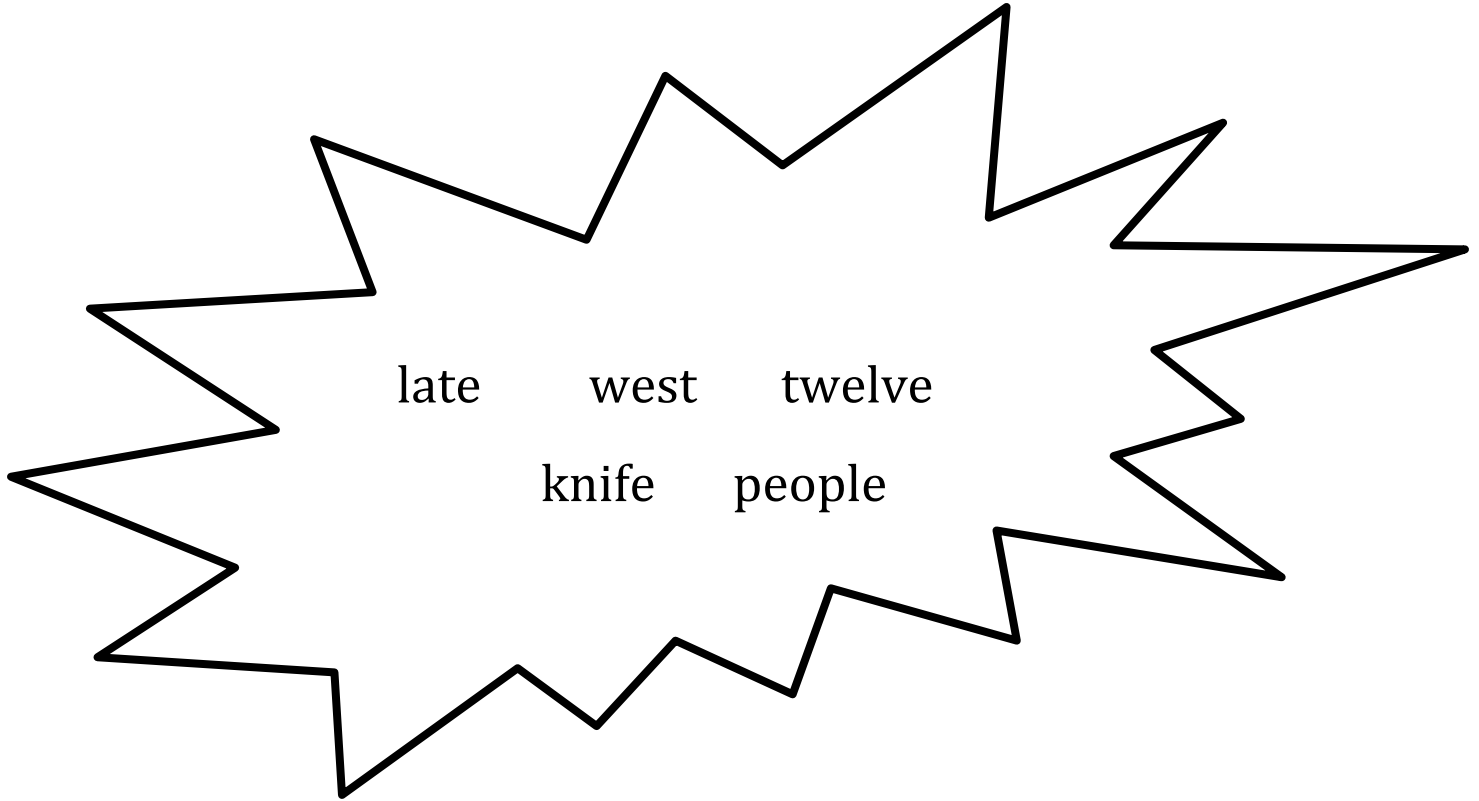
unique explode poor decide

When will you _____ on a movie to watch?

Name: _____

SPELLING REVIEW

Directions: Use these sight words to complete the activities below.



Complete the sentence with the correct word:

Sue is turning _____ today.

Please don't be _____ tomorrow.

Jeff will cut it with a _____.

The sun sets in the _____.

How many _____ are invited?

Trace the words in three different colors:

cylinder

late

people

west

twelve

Complete the sentence below with the correct challenge word.

whether

debate

weather

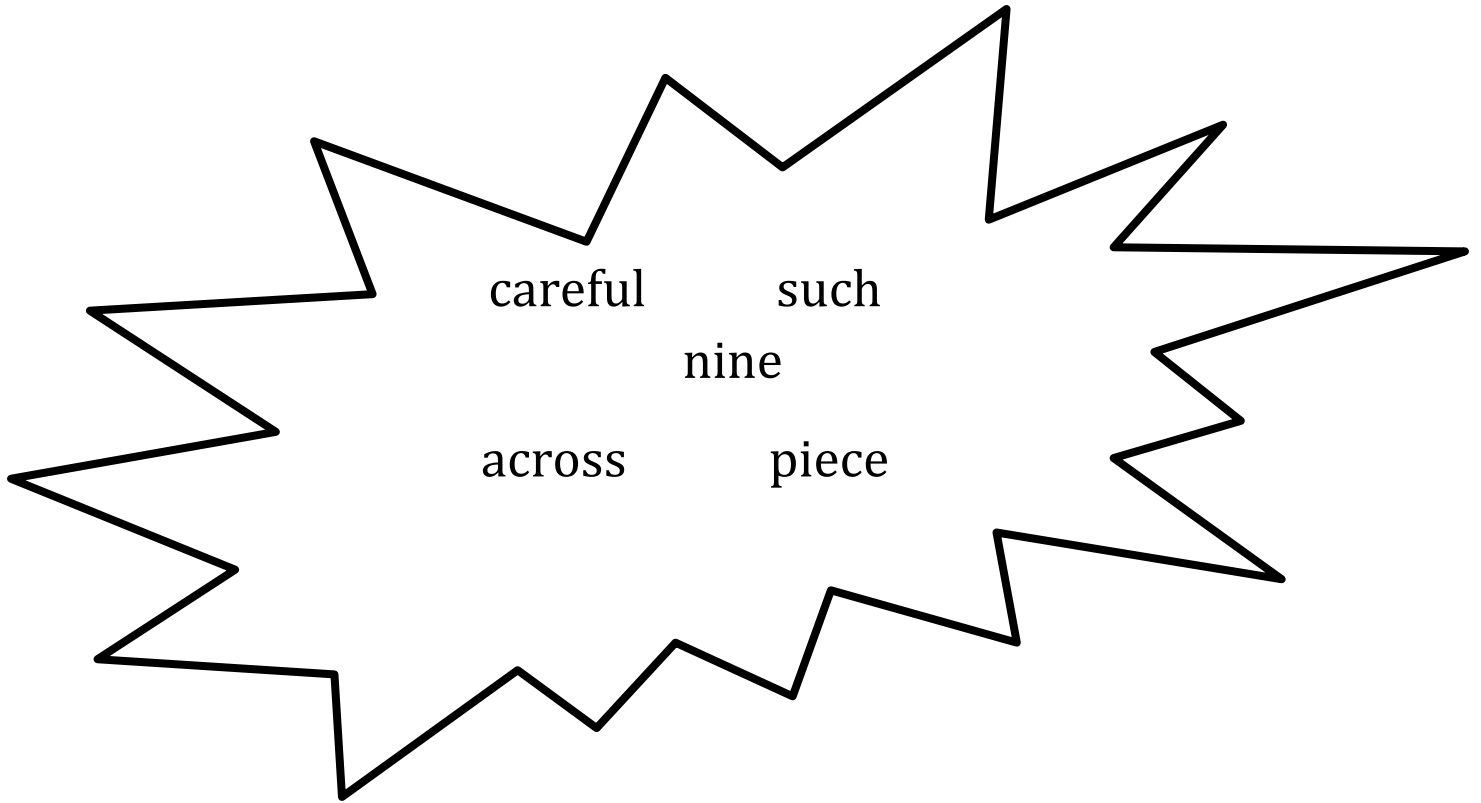
decimal

The _____ man is reporting some rain today.

Name: _____

SPELLING REVIEW

Directions: Use these sight words to complete the activities below.



Unscramble the words below:

nnie _____

cshu _____

rclafeu _____

rcaos _____

epcei _____

Trace the words in three different colors:

across
careful
nine
piece
such

Complete the sentence below with the correct challenge word.

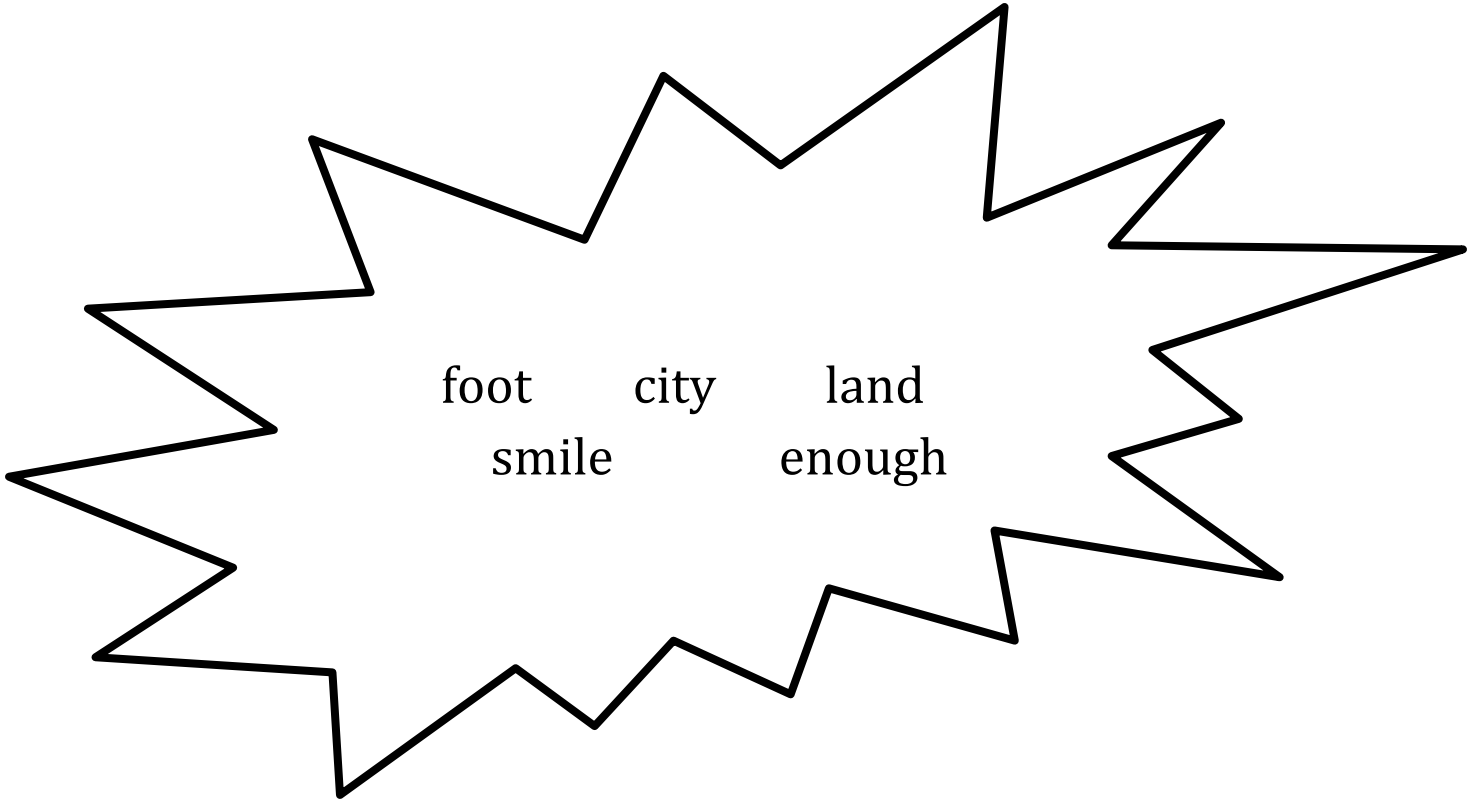
cube paws cent pause

When reading, you will need to _____ when you see a comma.

Name: _____

SPELLING REVIEW

Directions: Use these sight words to complete the activities below.



Put your spelling words in alphabetical order.

Unscramble the words below:

yict _____

ohgneu _____

dlna _____

emils _____

otof _____

Complete the sentence below with the correct challenge word.

Asia Artic Atlantic Africa

_____ and _____ are continents.

Name: _____

WRITING REVIEW

Directions: Circle all of the mistakes in this sentence.

The names of his brothers is john, bill and ted.

Now, rewrite the sentence correctly:

Next, change one of the names:

Finally, add an adjective in front of the word brothers:

Challenge: Change or add a word in the sentence to make it silly:

Name: _____

WRITING REVIEW

Directions: Circle all of the mistakes in this sentence.

School started in exactly thre weks from now.

Now, rewrite the sentence correctly:

Next, change the event i.e. "school":

Finally, change the sentence into a past tense:

Challenge: Change or add a word in the sentence to make it silly:

Name: _____

WRITING REVIEW

Directions: Circle all of the mistakes in this sentence.

what a beutiful rainbow in the sky this afternon.

Now, rewrite the sentence correctly:

Next, change the adjective that is in front of the word “rainbow”:

Finally, change the time of day:

Challenge: Change or add a word in the sentence to make it silly:

Name: _____

WRITING REVIEW

Directions: Circle all of the mistakes in this sentence.

The plane leeves in to hours to san diego.

Now, rewrite the sentence correctly:

Next, change the destination:

Finally, change the sentence to the future tense:

Challenge: Change or add a word in the sentence to make it silly:

Name: _____

WRITING REVIEW

Directions: Circle all of the mistakes in this sentence.

Dont forgot two take out the trash this morning.

Now, rewrite the sentence correctly:

Next, add an adjective in front of the word “trash”:

Finally, change the time of day:

Challenge: Change or add a word in the sentence to make it silly:
