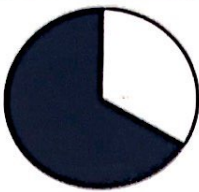



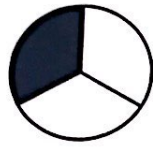
Practice 8





A fraction is a part (or parts) of a whole item or shape.


 $\frac{2}{3}$ Two parts out of three are shaded.	 $\frac{1}{5}$ One part out of five is shaded.
--	--


Directions: Look at each shape. Write the fraction that tells how many parts of the whole object are shaded. The first one has already been done for you.


1. 
 $\frac{1}{3}$


2. 
 $\frac{5}{6}$

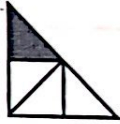
3. 
 $\frac{3}{5}$


4. 
 $\frac{3}{4}$

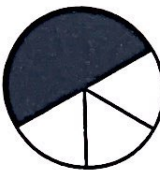
5. 
 $\frac{1}{2}$


6. 
 $\frac{1}{2}$


7. 
 $\frac{5}{6}$

8. 
 $\frac{1}{4}$

9. 
 $\frac{3}{4}$

10. 
 $\frac{3}{4}$

11. 
 $\frac{2}{4}$

12. 
 $\frac{2}{3}$