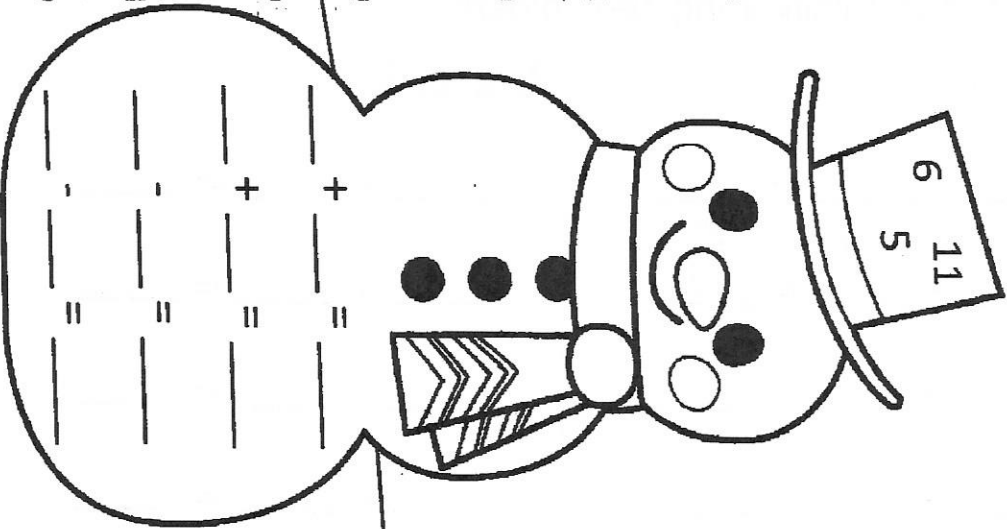


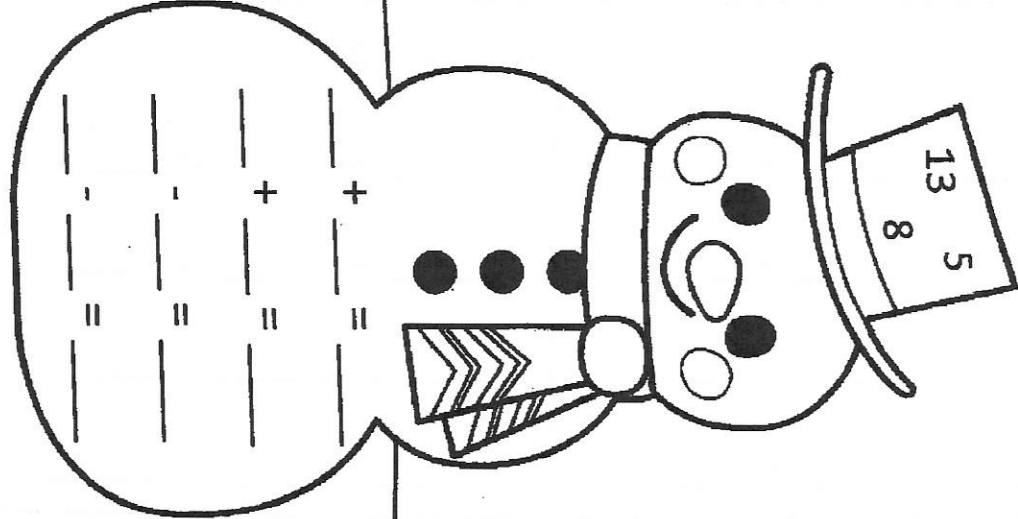
Name: _____

Directions: Use the numbers on the snowmen's hats to make a fact family.



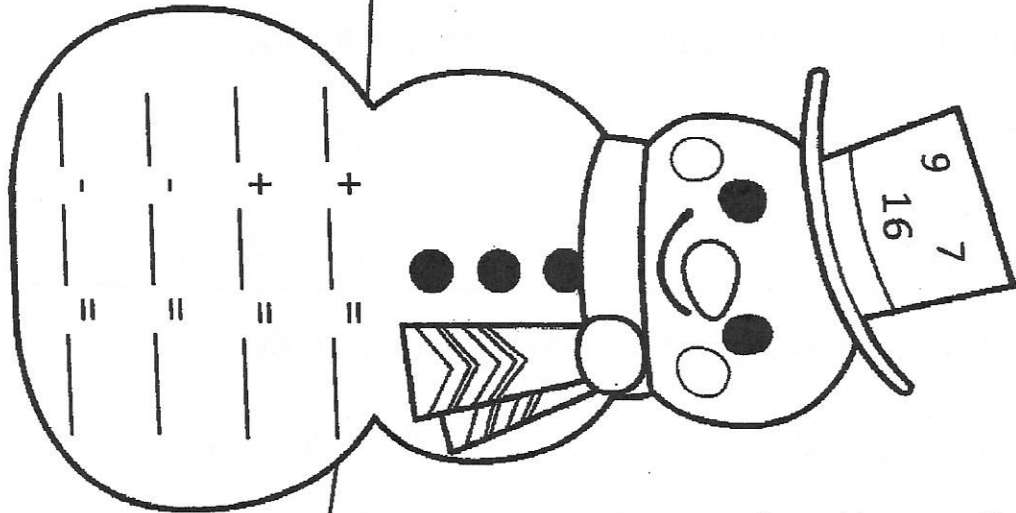
A snowman wearing a top hat with the numbers 6, 11, and 5. Below the snowman is a fact family grid with blank lines for numbers and mathematical symbols.

	+		=	
	-		=	
	+		=	
	-		=	



A snowman wearing a top hat with the numbers 13, 8, and 5. Below the snowman is a fact family grid with blank lines for numbers and mathematical symbols.


	+		=	
	-		=	
	+		=	
	-		=	



A snowman wearing a top hat with the numbers 9, 16, and 7. Below the snowman is a fact family grid with blank lines for numbers and mathematical symbols.

	+		=	
	-		=	
	+		=	
	-		=	

How Do You Make Hot Cocoa?



First, _____

Next, _____

Then, _____

Finally, _____

Pray the Lord's Prayer before bed.

**Our Father Our Father, Who art in
Heaven, hallowed be Thy name;**

**Thy Kingdom come, Thy Will be done on
earth as it is in Heaven.**

**Give us this day our daily bread, and
forgive us our trespasses,**

**As we forgive those who trespass
against us;**

**And lead us not into temptation, but
deliver us from evil.**

Amen.