


Day 1
(2 sides)



Name _____

Fluency Practice







Copyright © The McGraw-Hill Companies, Inc.



Directions: Trace and write each number on the line.

Fluency Practice











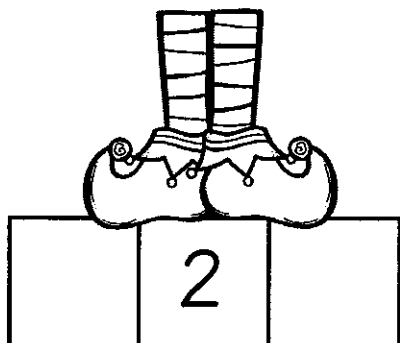



Directions: Trace and write each number on the line.

Name _____

Date _____

Before & After Math

Fill in the blanks with the missing numbers.



Day 3

2 Sides

Numbers 1-20

1	2	3	4	5	6	7	8	9	10
1	2	3	4	5	6	7	8	9	10


Numbers 1-20

1	2	3	4	5	6	7	8	9	10
1	2	3	4	5	6	7	8	9	10

Numbers 1-20

1	2	3	4	5	6	7	8	9	10
1	2	3	4	5	6	7	8	9	10

Order!



Name: _____

Write these numbers in order. Start with the smallest number.

20 18 1 11

10 15 0 6

15 6 7 19

2 7 19 0

Write these numbers in order. Start with the largest number.


13 1 19 12

14 3 1 20

6 12 10 5

1 10 14 16

Day 5 What's Missing?



Name: _____

1. 15 16 17 18 19

2. 9 10 11 12 14

3. 7 9 10 11 12

4. 13 14 16 17 18

5. 10 11 12 14 15

6. 3 4 5 6 7

7. 9 10 12 13 14

8. 10 11 12 13 14

